




Match the following multiplication sentences on the left with the correct array.

$2 \times 4 = 8$	● — ●	<div style="border: 1px dashed black; width: 150px; height: 20px;"></div>
$3 \times 3 = 9$	● — ●	<div style="border: 1px dashed black; width: 150px; height: 20px;"></div>
$2 \times 3 = 6$	● — ●	<div style="border: 1px dashed black; width: 150px; height: 20px;"></div>
$2 \times 2 = 4$	● — ●	<div style="border: 1px dashed black; width: 150px; height: 20px;"></div>

DRAG & DROP THE ANSWER



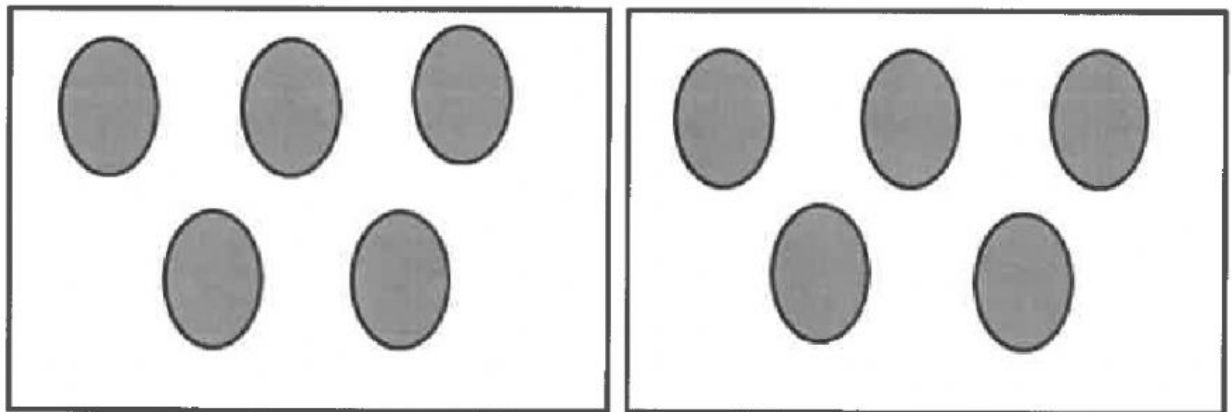
2 Determine if the statement $3 \times 6 = 18$ true or false?

(A) True

(B) False

3 There are groups of dots.

There are dots in each group.




4 A bookcase has 3 shelves. Each shelf holds 5 books.

Use the scratchpad to model the problem, then answer the question.

How many books are on the bookcase? books.

- 5 The array below represents a product.



Which expression can be used to find the product represented by the array?

- (A) $4 + 3$
- (B) $4 + 4 + 4 + 4$
- (C) 3×4
- (D) $3 \times 3 \times 3 \times 3$