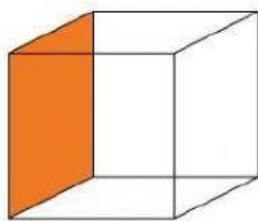


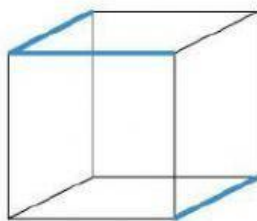


1) RESPONDA CORRETAMENTE

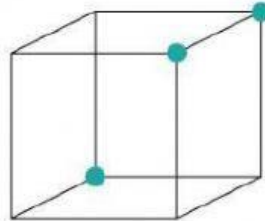
a) Um cubo tem:



FACE

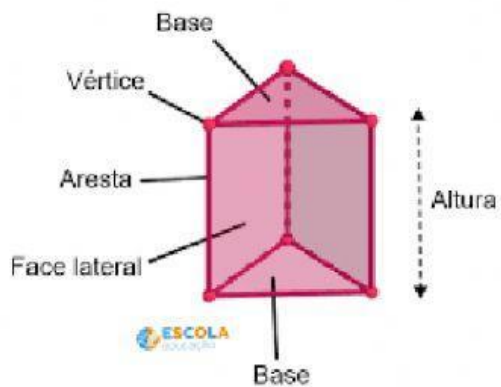


ARESTA



VÉRTICE

b) Um prisma de base triangular possui:



FACES

ARESTAS

VÉRTICES

C) De acordo com a figura abaixo, selecione os objetos que se movimentam através da rolagem (ou seja, que se movimentam em trajetória circular).

