



**2ND GRADE**

# Social Studies Exam

Date: Wednesday, September, 9th, 2020





1.- Use the words from the word bank and label the pictures.

**URBAN**

**RURAL**

**SUBURB**

1.




2.



3.



2.- Drag and match the pictures with the words and their meanings



Leader

Rule

Group

Tells you what you should and should not do.

Number of people who work, live or spend time together.

Someone who leads others.

3.- Choose the correct answer.













Compass ross

Globe

Map

4.- Look at the grid and answer.

5					
4					
3					
2					
1					
	A	B	C	D	E

Name the location of each item on the map:

<b>play area:</b> B4, E2	<b>ice cream:</b>
<b>trash can:</b>	<b>fountain:</b>
<b>park bench:</b>	<b>tree:</b>