

SCIENCE DIAGNOSTIC TEST

1.- PERSONAL INFORMATION		
Subject: Science	Grade: Third grade	
Student's name:	Date:	
Teacher's name: Gissel Andrade	Time: 60 minutes	N. of Mistake: _____ N. of Correct: _____

QUESTIONNAIRE DEVELOPMENT

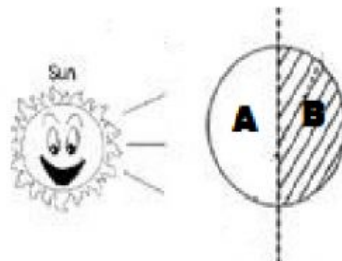
Instructions: Dear student please follow these recommendations:

- ✓ Read each question carefully.
- ✓ Focus on your test.
- ✓ Write clearly and accurately.
- ✓ Raise your hand if you need the teacher's help.
- ✓ Avoid to use liquid paper.

1.-Instruction: Circle the correct answer.

A. What does the picture show in A?

- a. Night
- b. Day
- c. Cold



B. During the night the sky is...

- a. Light
- b. Dark
- c. Hot

C. Which activity do most people do during the night?

- a. Cook
- b. Go shopping
- c. Sleep

D. Andrew takes an umbrella and puts on a jacket because the weather is

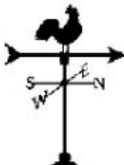
- a. Sunny
- b. Windy
- c. Rainy



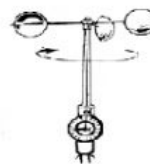
E. The instrument to measure the intensity of the wind is:



a. Thermometer



b. Weather vane



c. Anemometer

F. The inventor of the first telescope is:

- a. Isaac Newton
- b. Galileo Galilei
- c. Edwin Hubble

2.- Instruction: Complete the sentences with one of the following words

liquid

solid

ice

gaseous

A. If the temperature is very cold water becomes _____

B. When we boil water it changes to _____ state.

C. Tables and chairs are in _____ state.

D. Rivers are in _____ state.

Elaborado por:	Revisado por:	Aprobado por:	Certificado por la Junta Académica:
Profesor del área:	Jefe de área:	Directora General:	Presidenta:
Lic. Gissel Andrade	Lic. Jhovanna Ponce	Msc. Alexandra Lan	Msc. Alexandra Lan
Firma: _____	Firma: _____	Firma: _____	Firma: _____