


PROBABILITY


CHOOSE THE CORRECT PROBABILITY IN EACH EVENT.




How likely are you to pick out a  ?


Equal probability Likely



How likely are you to pick out a  ?


Unlikely Likely



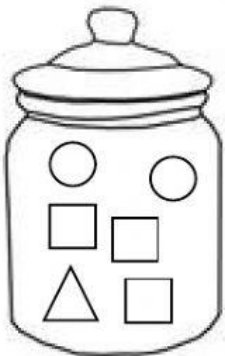
How likely are you to pick out a  ?

Impossible Certain




How likely are you to pick out a  ?


Unlikely Possible




How likely are you to pick out a  ?


Equal probability Impossible




How likely are you to pick out a  ?


Equal probability Likely



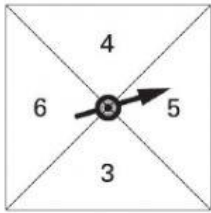
How likely are you to pick out a  ?

Certain Possible



How likely are you to pick out a  ?

More Likely less likely



Look at the spinner. What is the chance of spinning the following numbers? Connect your answers with a line.

An odd number

A number 2

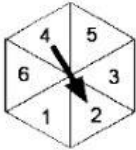
A number less than 10

Certain

Impossible

Equal probability

Likely



For this spinner, write a number that is impossible to spin. _____

What is the probability to spinning an even number? _____