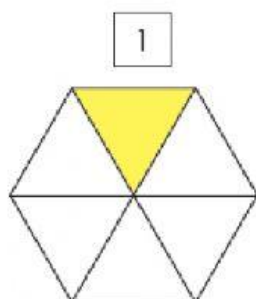
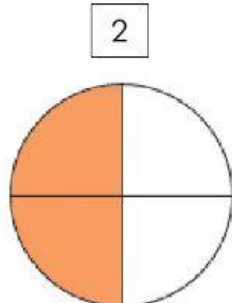


INSTRUCCIONES: Escribe el número de la imagen en la fracción correspondiente.

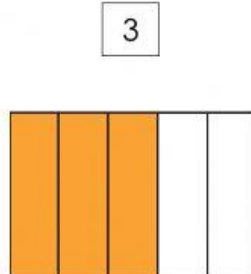
() $\frac{3}{5}$



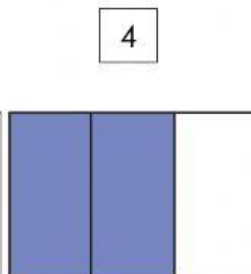
() $\frac{2}{3}$



() $\frac{1}{6}$



() $\frac{2}{4}$



() $\frac{1}{5}$

