



Name: \_\_\_\_\_

Class: \_\_\_\_\_

Date: \_\_\_\_\_

Fill in the blanks:


$$8 + \boxed{\phantom{00}} = 9$$

$$\boxed{\phantom{00}} + 2 = 4$$


$$5 + 3 = \boxed{\phantom{00}}$$

Solve addition or subtraction problems on the left and match your answers with the pictures:


$$6 + 3$$



$$7 - 2$$



$$5 + 1$$





True or false:(Select the correct answers)

1.  $98 + 70 = 70 + 98$

True

False

2. Three Hundred twenty-three = 233

True

False

Complete the patterns: (Drag and drop the appropriate shape from the given box)

