






Name: _____ Section: _____

LS 3 Science - Term 1
Measurement Topic 1: Diversity
Temporary and Permanent Changes

Identify whether each of the following is a temporary change or a permanent change. Then, explain your answer in 1 sentence.

<p>1. Folding a towel Type of Change: _____ Reason: _____</p> 	<p>2. Cracking an egg Type of Change: _____ Reason: _____</p> 
<p>3. Tearing a piece of paper Type of Change: _____ Reason: _____</p> 	<p>4. Molding clay Type of Change: _____ Reason: _____</p> 
<p>5. Cutting down a tree Type of Change: _____ Reason: _____</p> 	<p>6. Tying a piece of string Type of Change: _____ Reason: _____</p> 