





MATH DEPARTMENT FOR GR.2

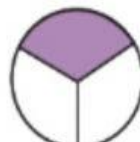
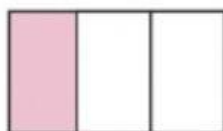


Directions: Choos the correct shapes.

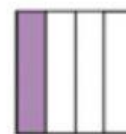
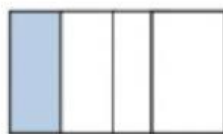
1) The shapes that represent the fraction $\frac{1}{2}$.



2) The shapes that represent the fraction $\frac{1}{3}$.



3) The shapes that represent the fraction $\frac{1}{4}$.



4)

a. How many halves are there in a whole? _____

b. How many thirds are there in a whole? _____

c. How many fourths are there in a whole? _____