
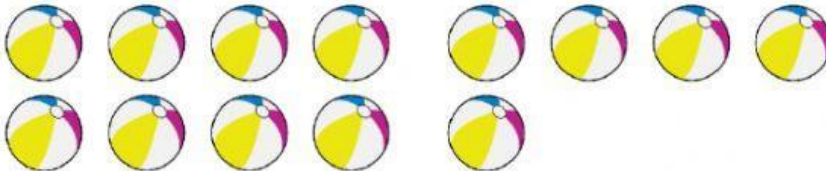


Paige has 8 beach balls.

Drew has 5 beach balls.


 How many altogether?

$$\square + \square = \square$$

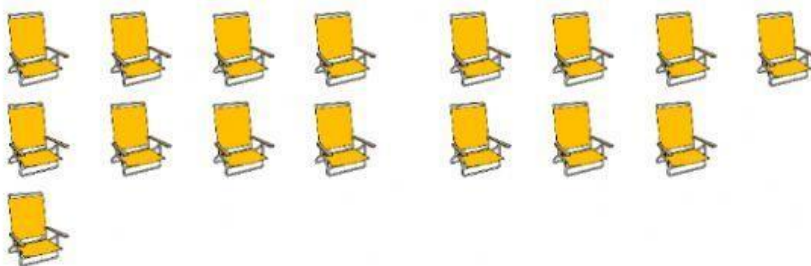


Shantel sees 9 beach chairs.

Kyle sees 7 beach chairs.


 How many altogether?

$$\square + \square = \square$$



Paige counts 10 umbrellas.

Drew counts 10 umbrellas.


 How many altogether?

$$\square + \square = \square$$



Shantel has 12 buckets.

Kyle has 7 buckets.

 How many altogether?

$$\square + \square = \square$$

