


## Measuring in centimeters


Use your ruler to measure the pencils in centimeters




\_\_\_\_\_ cm



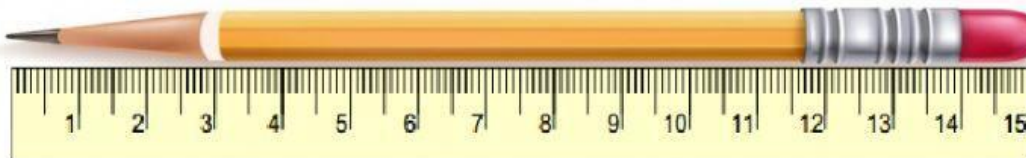
\_\_\_\_\_ cm



\_\_\_\_\_ cm



\_\_\_\_\_ cm



\_\_\_\_\_ cm

How long is the longest pencil?

\_\_\_\_\_ cm.

How long is the shortest pencil?

\_\_\_\_\_ cm.