

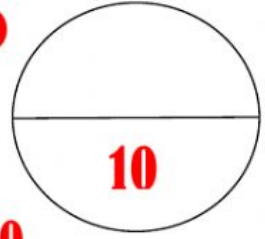
FORMATIVE ASSESSMENT FA(A) FA (B)

NAME

CLASS 4

DATE

MARKS 10



I.FILL IN THE BLANKS

5X1=5

1. Air is a
2. Plants require carbon dioxide gas to prepare their own food
3. The percentage of oxygen in air is
4. The carbon dioxide gas is present in soft drinks.....
5. The burning materials require

II.MATCH THE FOLLOWING

4X1=4

1. Oxygen 78 %
2. Carbon dioxide 0.97 %
3. Nitrogen 21 %
4. Other gases 0.03 %

FORMATIVE ASSESSMENT FA(A) FA (B)

NAME

CLASS 4

10

DATE

MARKS 10

I.STATE WHETHER TRUE OR FALSE

5X1=5

1. There will be drought if it rains heavily
2. Water resources are decreasing day by day
3. Chlorine is used for purifying drinking water
4. We should not wash very often vessels in which we store drinking Water
5. Deforestation increase the rain

II.ANSWER THE FOLLOWING QUESTIONS ? 2X 2½ =5

- 1.Where do we store the rain water we get in rainy season?
- 2.Where do we store the rain water in our house?

FORMATIVE ASSESSMENT FA(A) FA (B)

NAME

CLASS 4

10

DATE

MARKS 10

ANSWER THE FOLLOWING QUESTIONS 5X2=10

1.What is the dam across the Cauvery ?

2.What is the instrument used to measure the amount of rain?

3.When is the groundwater level very low?

4.Which is the only Planet with water?

5.Name the largest planet in our solar system?

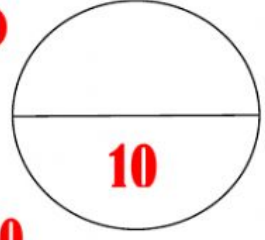
FORMATIVE ASSESSMENT FA(A) FA (B)

NAME

CLASS 4

DATE

MARKS 10



I.WRITTE THE FOLLOWING PLANETS NAME ? 5X1=5

1.fourth planet name _____

2.seventh planet _____

3.third planet _____

4.Sixth planet _____

5.fifth planet _____

II.ANSWER THE FOLLOWING QUESTIONS ? 2X 2½ =5

1.Name the instrument used by the child to observe the sky?

2. What all can be seen in the night sky?

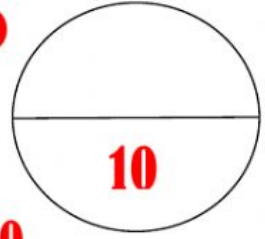
FORMATIVE ASSESSMENT FA(A) FA (B)

NAME

CLASS 4

DATE

MARKS 10



I.STATE WHETHER TRUE OR FALSE

5X1=5

1. Venus is the third planet in the solar system
2. The sun is a ball of fire.
3. There is no air and water on the earth
4. Mercury is the nearest planet to the sun.
5. The Eighth Planet In The Solar System Is Neptune

II.MATCH THE FOLLOWING

5X1=5

- | | |
|-------------|----------------|
| 1. Jupiter. | 6th planet |
| 2. Pluto. | Nearest Planet |
| 3. Saturn | largest planet |
| 4. Mercury. | Life exists |
| 5. Earth | dwarf planet |

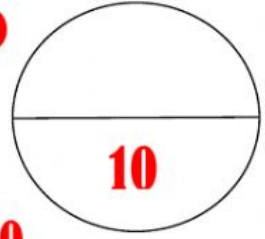
FORMATIVE ASSESSMENT FA(A) FA (B)

NAME

CLASS 4

DATE

MARKS 10



ANSWER THE FOLLOWING QUESTIONS 5X2=10

What is the path of a planet around the sun?

Write the name of a dwarf planet in the solar system?

How many planets are there in the solar system?

What is the position of our earth in the solar system?

Which planet supports life why?

FORMATIVE ASSESSMENT FA(A) FA (B)

NAME

CLASS 4

10

DATE

MARKS 10

ANSWER THE FOLLOWING QUESTIONS 5X2=10

1. Which planet is red in colour?

2. Which two planets have rings around them?

3. Which is the coldest planet?

4. Which is the hottest planet?

5. Who discovered halley comet?

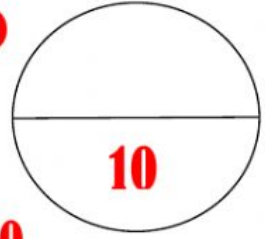
FORMATIVE ASSESSMENT FA(A) FA (B)

NAME

CLASS 4

DATE

MARKS 10



ANSWER THE FOLLOWING QUESTIONS 5X2=10

1.What is the satellite of India?

2.What is the name of the telescope at Kavalur?

3.Where is Asia's largest telescope?

4.What is the satellite used for the education of students?

5.What is the use of INSAT 3B

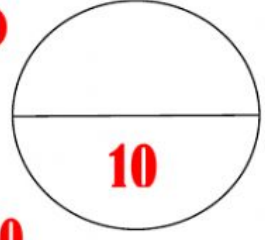
FORMATIVE ASSESSMENT FA(A) FA (B)

NAME

CLASS 4

DATE

MARKS 10



SCIENCE IN DAY TO DAY LIFE

I.ANSWER THE FOLLOWING QUESTIONS

10X1=10

1. what did man write first?

2. When was the telephone invented?

3. Write any two equipment used to calculate with the hands?

4. Write any three uses of the printing press?

5. Who designed the printing press first?