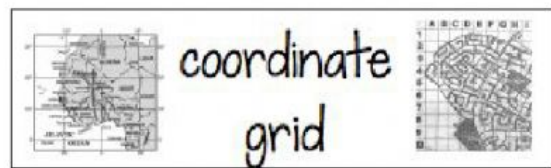


Instructions: Match the part of the map with the right answer.

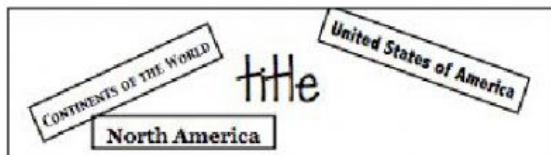
1. Tells you what the map is about.



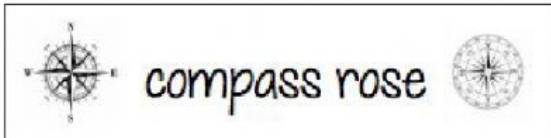
2. Shows the directions.



3. Are the four main directions in a compass rose.



4. Shows what the symbols on the map means.



5. Helps you find places quickly in a map. It shows a specific point in the map with the use of rows and columns.

north, south, east and west