
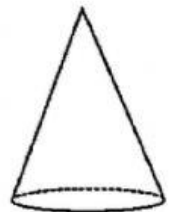
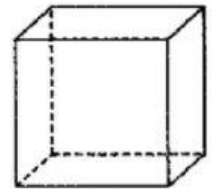
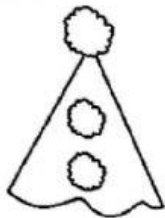


NOME: _____

➡ **LIGUE OS DESENHOS ÀS FIGURAS CORRESPONDENTES:**



➡ **COMPLETE A CRUZADINHA SOBRE OS SÓLIDOS GEOMÉTRICOS:**

