
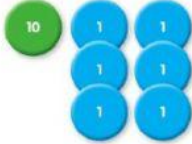
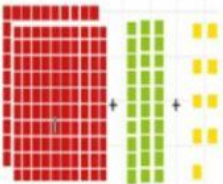


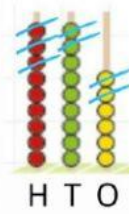


1.   Write the correct addition !
- =
2.  +  +  Fill the blanks with the correct answer !
- =

3.



Fill the blanks with the correct answer !

$$\boxed{\dots} \dots \boxed{\dots} = \boxed{\dots}$$

4. Mother buys 389 avocados from the supermarket, then she buys 506 oranges in the same supermarket. How many fruit does she have altogether ?

5. Daniel makes 414 glasses of lemonade. He sells 257 glassess of lemonade during the day. How many glasses of lemonade are left ?
