




<p>d)</p>  <p>Edges = Corners =</p>	<p>e)</p>  <p>Edges = Corners =</p>	<p>f)</p>  <p>Edges = Corners =</p>
--	--	--

**2. Find the correct answer for the following and write it in the bracket.**

a) Which object among the following has more corners? ( )



b) Find the one-edged object from the following. ( )



c) Find the object that has no corners. ( )



d) Find the object that has two edges only. ( )



e) Find the object that has one edge only. ( )

