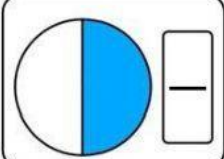
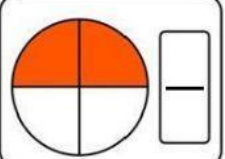
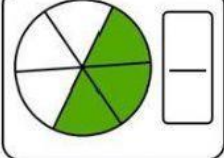
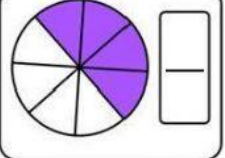
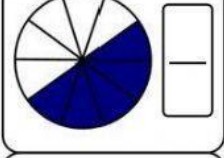
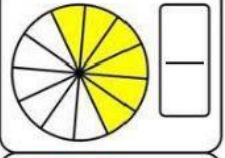
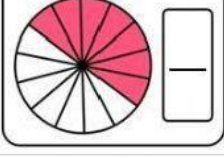
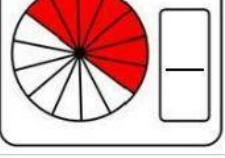


LAS FRACCIONES

ESCRIBE LA FRACCION REPRESENTADA
EN LAS GRAFICAS.

ESCRIBE COMO SE LEEN LAS
SIGUIENTES FRACCIONES

$\frac{2}{5}$	$\frac{3}{8}$	$\frac{6}{9}$
$\frac{1}{2}$	$\frac{8}{12}$	$\frac{4}{6}$

ESCRIBE LAS PARTES
DE UNA FRACCION


$\frac{2}{3}$		$\frac{5}{8}$

COLOCA LAS FRACCIONES PROPIAS E IMPROPIAS

PROPIAS					IMPROPIAS
	$\frac{2}{3}$	$\frac{4}{3}$	$\frac{2}{5}$	$\frac{6}{5}$	
	$\frac{8}{6}$	$\frac{4}{8}$	$\frac{1}{2}$	$\frac{9}{3}$	

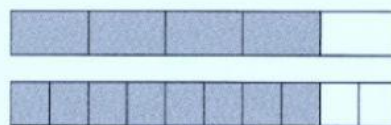
ESCRIBE LAS FRACCIONES EQUIVALENTES A CADA CASO

(a)



$$\frac{1}{4} = \frac{\quad}{\quad}$$

(b)



$$\frac{4}{5} = \frac{\quad}{\quad}$$