



O S D A V Public School, Kaithal
Class-I
Subject: Maths
Month: September

Name : _____ Roll No. _____ Sec. _____

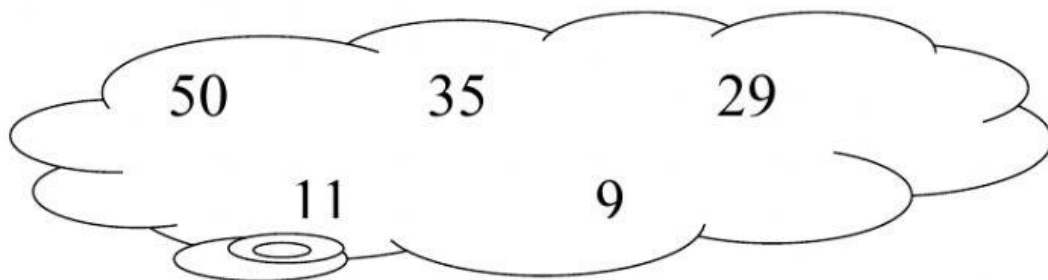
Q1. Arrange the numbers in Descending order.

1. 38 to 33-

□	□	□	□	□	□
---	---	---	---	---	---

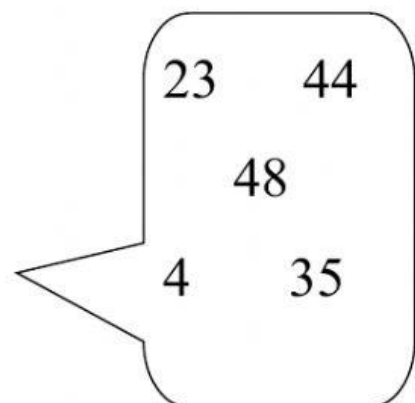
2. 23 to 18-

□	□	□	□	□	□
---	---	---	---	---	---



□	□	□	□	□
---	---	---	---	---


□	□	□	□	□
---	---	---	---	---



Q2. Circle the right answer.

9th	Sixth	Eighteenth	Ninth
7th	Ninth	Seventh	Tenth
2nd	Second	Eighteenth	Twelvth

Q3. Colour the third apple.



Q4. Count and colour the graph.

