













SHORT OR LONG

Thick the correct answer!

Tandai jawaban yang tepat!

<p>1. Which pencil is shorter?</p> <div>   </div> <div> <input type="checkbox"/> <input type="checkbox"/> </div>	<p>2. Which ruler is longer?</p> <div>   </div> <div> <input type="checkbox"/> <input type="checkbox"/> </div>
<p>3. Which marker is longer?</p> <div>   </div> <div> <input type="checkbox"/> <input type="checkbox"/> </div>	<p>4. Which crayon is shorter?</p> <div>   </div> <div> <input type="checkbox"/> <input type="checkbox"/> </div>
<p>5. Which rubber is longer?</p> <div>   </div> <div> <input type="checkbox"/> <input type="checkbox"/> </div>	<p>6. Which ballpoint is shorter?</p> <div>   </div> <div> <input type="checkbox"/> <input type="checkbox"/> </div>

Drag and Drop

klik dan geser pada kotak jawaban yang sesuai

short	long	rubber	pencil case
short	long	highlighter	ballpoint

Contoh/example :



Pensil pendek

A


short

pencil

1. 

Pulpen panjang

A

2. 

Penghapus pendek

A

3. 

stabilo pendek

A

4. 

Tempat pensil panjang

A