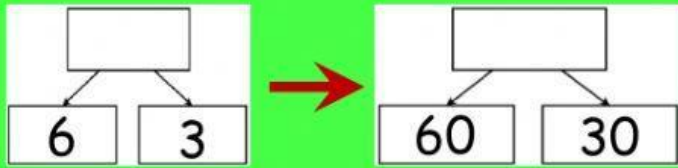
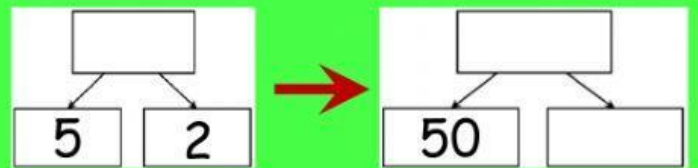


Sumando Decenas




$$6 + 3 = \square$$

$$60 + 30 = \square$$



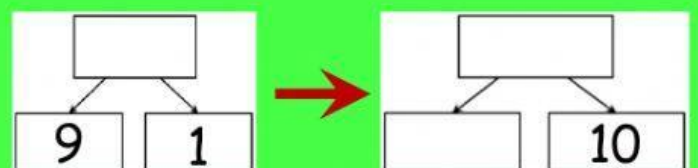
$$5 + 2 = \square$$

$$50 + 20 = \square$$



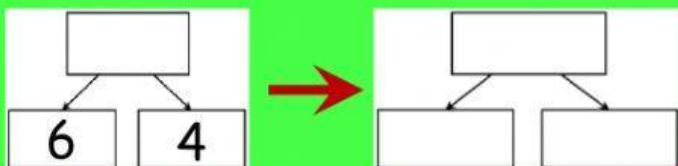
$$8 + 2 = \square$$

$$80 + \square = \square$$



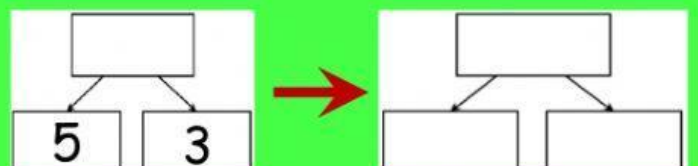
$$9 + 1 = \square$$

$$\square + 10 = \square$$




$$6 + 4 = \square$$

$$\square + \square = \square$$



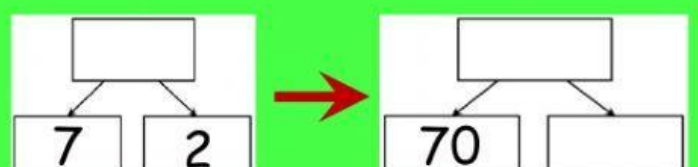
$$5 + 3 = \square$$

$$\square + \square = \square$$



$$4 + 5 = \square$$

$$40 + \square = \square$$



$$7 + 2 = \square$$

$$70 + \square = \square$$