

Nama : \_\_\_\_\_  
Tanggal : \_\_\_\_\_



# PLACE VALUE: ONES, TENS AND HUNDREDS

August 27<sup>th</sup>, 2020

SD Tumbuh – Jogja Educational Spirit  
Kelas : Lower B  
Inquiry : Innovation And Technology  
Mata Pelajaran : CIPP Math

Teacher's feedback:

Nama : \_\_\_\_\_  
Tanggal : \_\_\_\_\_

Hello my Lower B friends? How are you today?  
Are you ready to learn CIPP Math with me?

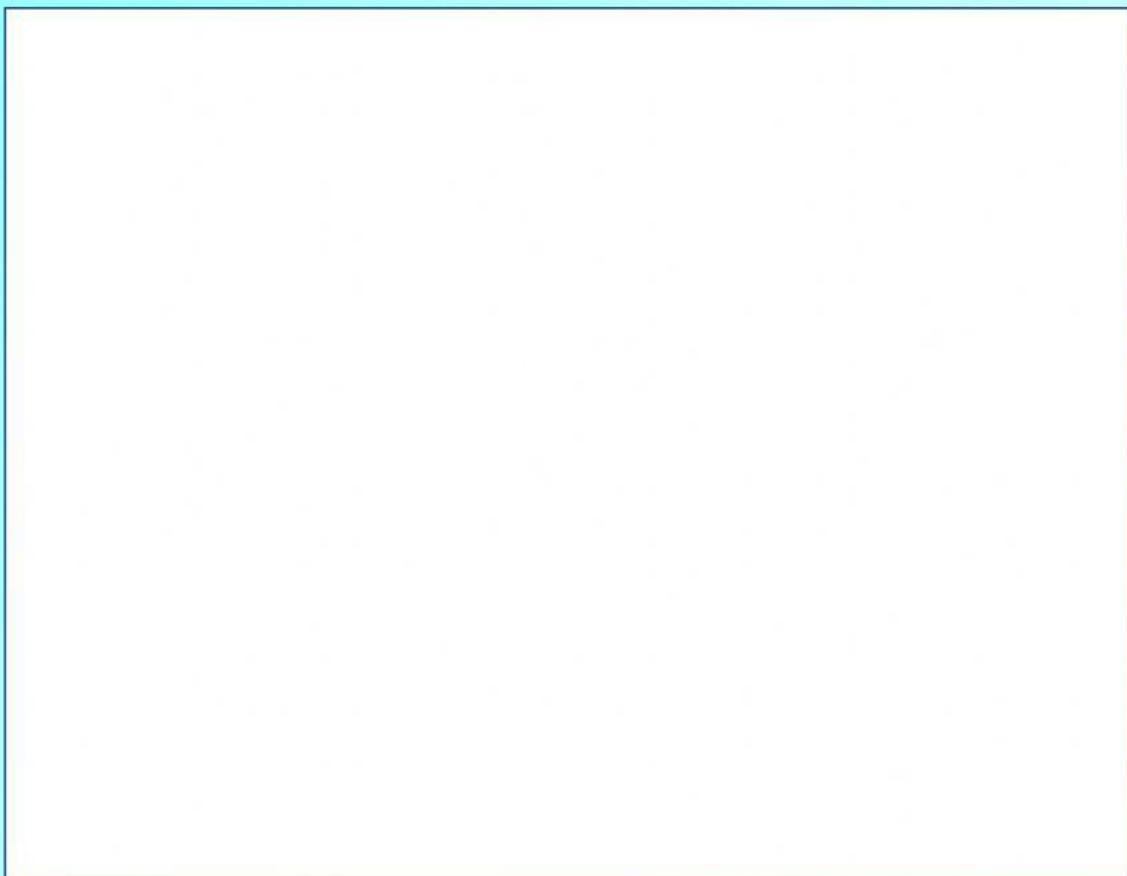


Today we are going to learn about **PLACE  
VALUE : ones and tens.**



Do you still remember what have we learned 3  
weeks a go?

I would remind you by the video below.



Nama : \_\_\_\_\_  
Tanggal : \_\_\_\_\_

Do the worksheet below!

# Understand Place Value

Grade 1

Fill in the table.

|    | Picture | Number | How many tens? | How many ones? |
|----|---------|--------|----------------|----------------|
| 1. |         | _____  | 2              | _____          |
| 2. |         | 40     | _____          | _____          |
| 3. |         | _____  | 0              | _____          |
| 4. |         | _____  | _____          | 3              |
| 5. |         | _____  | _____          | _____          |



Improve your math score by visiting us at

[www.argoprep.com/k8](http://www.argoprep.com/k8)



Nama : \_\_\_\_\_  
Tanggal : \_\_\_\_\_

# Understand Place Value

Grade 1



1.

Which digit is in the TENS place in 18?

ANSWER



2.

Which digit is in the TENS place in 85?

ANSWER



3.

Which digit is in the ONES place in 71?

ANSWER



4.

Which digit is in the ONES place in 90?

ANSWER



5.

Which digit is in the ONES place in 13?

ANSWER



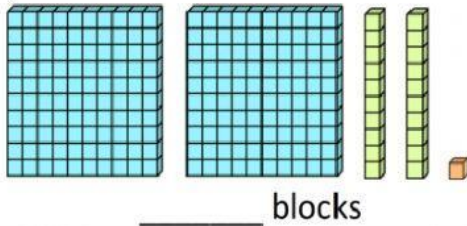
Improve your math score by visiting us at  
**[www.argoprep.com/k8](http://www.argoprep.com/k8)**

Nama : \_\_\_\_\_

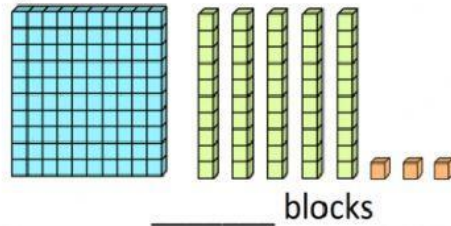
Tanggal : \_\_\_\_\_

Write down how many blocks are in each set.

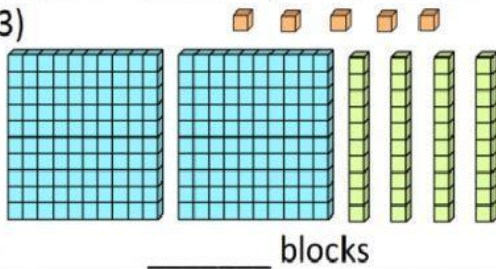
1)



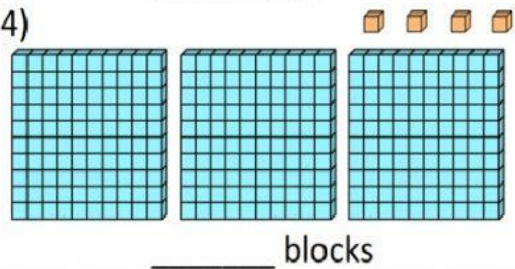
2)



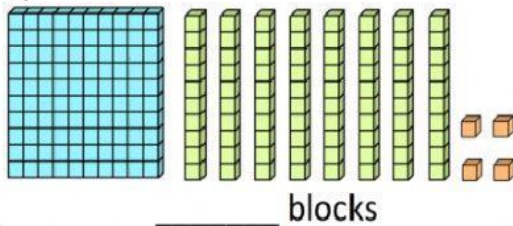
3)



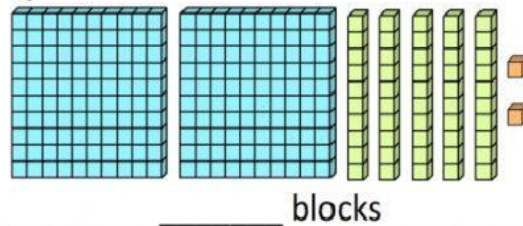
4)



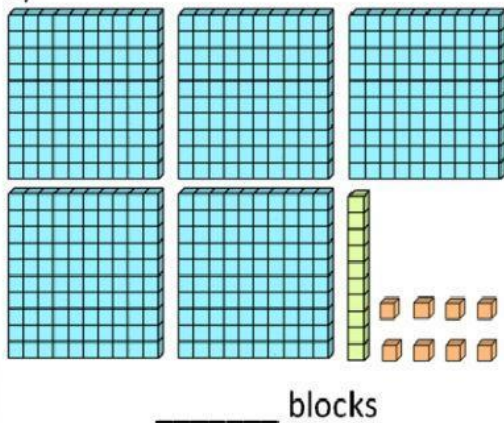
5)



6)



7)



8)

