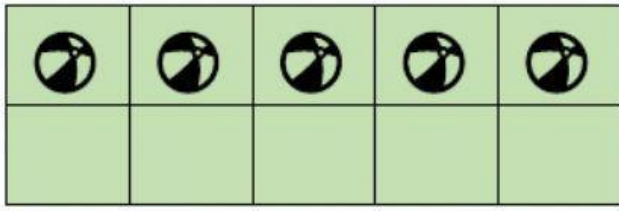
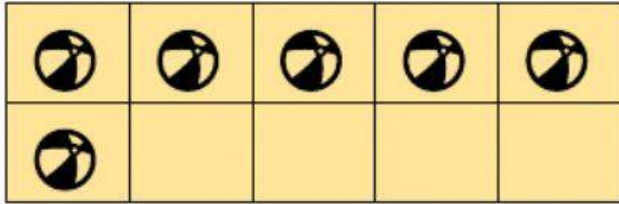


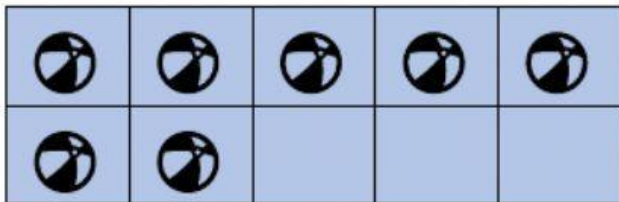
How many more do I need to make ten?



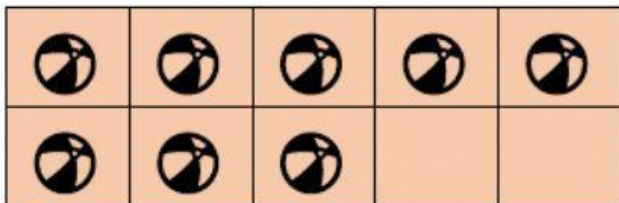
5	+		=	10
---	---	--	---	----



6	+		=	10
---	---	--	---	----



7	+		=	10
---	---	--	---	----



8	+		=	10
---	---	--	---	----



9	+		=	10
---	---	--	---	----