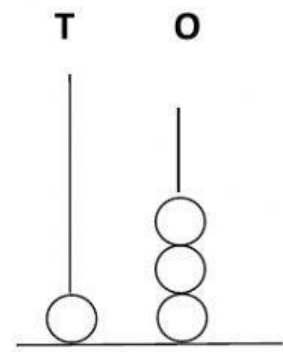
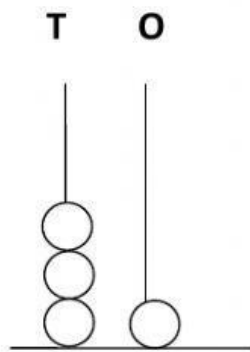
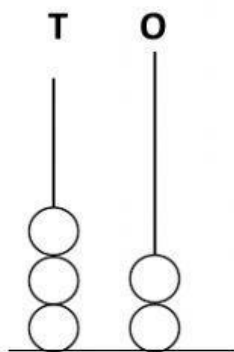
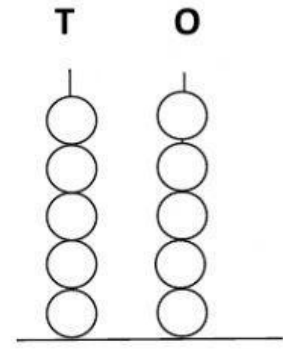
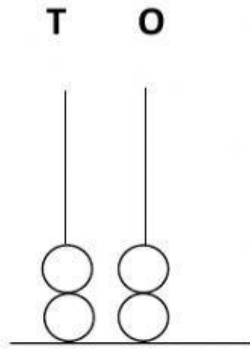
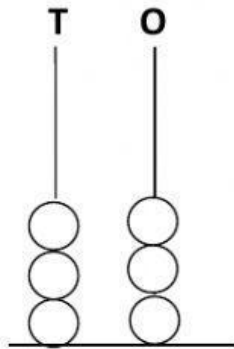


CLASS-1

What number does the abacus show?



Fill in the correct tens and ones for the given numbers:

a) 46 = _____ tens + _____ Ones

b) 50 = _____ tens + _____ Ones

c) 34 = _____ tens + _____ Ones

d) 9 = _____ tens + _____ Ones