

MATHEMATICS

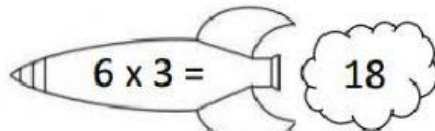
MULTIPLICATION OF 6 TIMES.

6 TIMES TABLE - BEARS SHEET 2

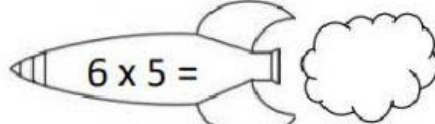
Draw a line to match each bear to his pot of honey.

6 TIMES TABLE - ROCKETS

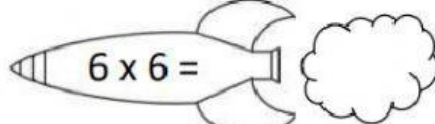
Write the answers inside the rocket smoke.



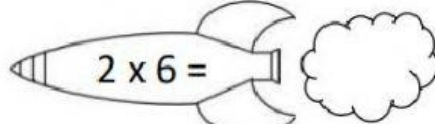
$6 \times 3 =$ 18



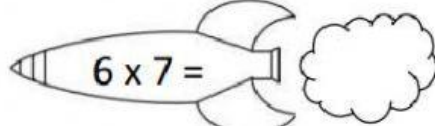
$6 \times 5 =$



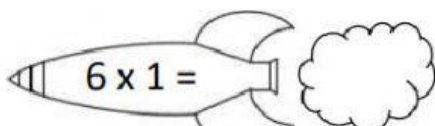
$6 \times 6 =$



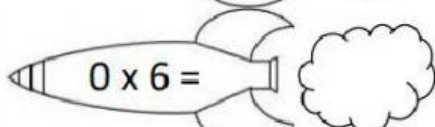
$2 \times 6 =$



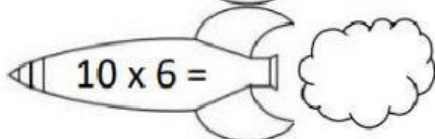
$6 \times 7 =$



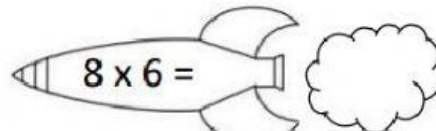
$6 \times 1 =$



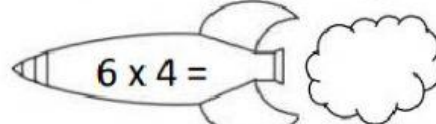
$0 \times 6 =$



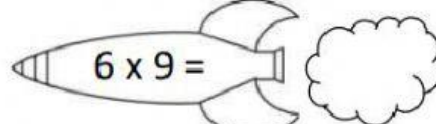
$10 \times 6 =$



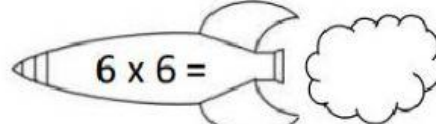
$8 \times 6 =$



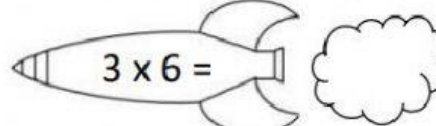
$6 \times 4 =$



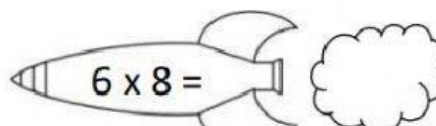
$6 \times 9 =$



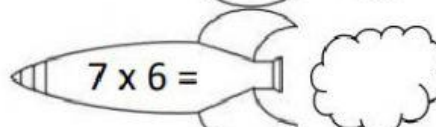
$6 \times 6 =$



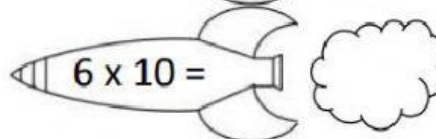
$3 \times 6 =$



$6 \times 8 =$



$7 \times 6 =$



$6 \times 10 =$