


















## Mathematics Review #2

Name \_\_\_\_\_ Date: \_\_\_\_\_

Use the graph below to answer the following questions.

Amount of bananas produced on each island

Long Island	     
Exuma	    
Abaco	   


Key :  = 10

- What type graph is represented above? \_\_\_\_\_
- How much bananas does the following islands produce
  - Abaco \_\_\_\_\_
  - Exuma \_\_\_\_\_
- Which Island produces the most bananas ? \_\_\_\_\_
- Which island produces the least amount of bananas? \_\_\_\_\_
- How much bananas does Exuma and Abaco produce in all? \_\_\_\_\_
- How much more bananas does Long Island produce than Abaco? \_\_\_\_\_

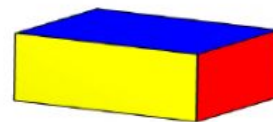
2. Name the 3D shape resented below



\_\_\_\_\_



\_\_\_\_\_



\_\_\_\_\_

