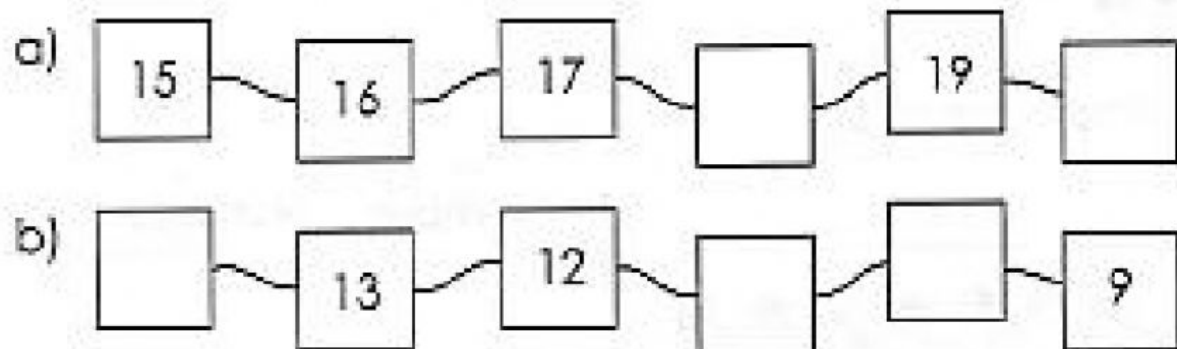
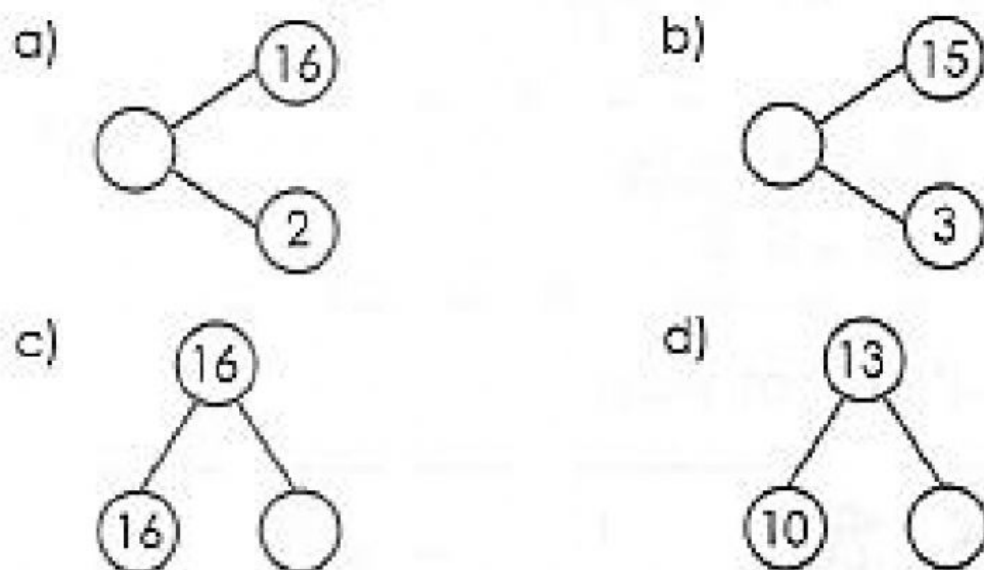


# MATHEMATICS

Fill in the missing numbers.



Fill in the missing numbers.



Add or Subtract.

a)  $15 + 2 = \underline{\hspace{2cm}}$


b)  $20 - 2 = \underline{\hspace{2cm}}$

c)  $6 + 7 = \underline{\hspace{2cm}}$

d)  $16 - 4 = \underline{\hspace{2cm}}$

# MATHEMATICS


Type two addition sentences and two subtraction sentences for the picture.



Fill in the blanks with 1<sup>st</sup>, 2<sup>nd</sup>, 3<sup>rd</sup>, 4<sup>th</sup> and 5<sup>th</sup> not show.



Fill in the blanks.



- a) \_\_\_\_\_ is the greatest number.
- b) \_\_\_\_\_ is the smallest number.
- c) Arrange the numbers in order.  
Begin with the smallest.

\_\_\_\_\_, \_\_\_\_\_, \_\_\_\_\_, \_\_\_\_\_  
(smallest)