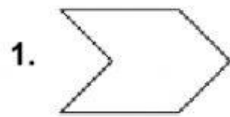
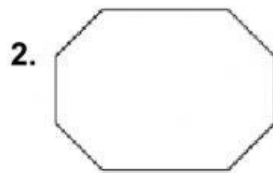


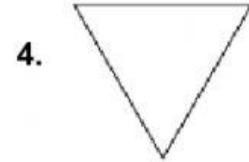
Polygons

Choose the name for each polygon.

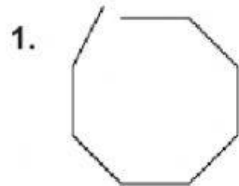








Is each figure a polygon? Choose yes or no.



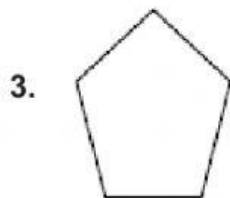
Yes

No



Yes

No



Yes

No



Yes

No

Choose the **name of the polygon** that each traffic sign looks like.

1.



2.



3.



4.



5.



6.



Complete the following **multiplication tables**.

$3 \times 3 = \underline{\quad}$

$6 \times 9 = \underline{\quad}$

$8 \times 8 = \underline{\quad}$

$9 \times 7 = \underline{\quad}$

$10 \times 8 = \underline{\quad}$

$7 \times 3 = \underline{\quad}$