

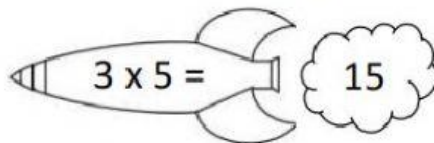
MATHEMATICS

MULTIPLICATION OF 3 TIMES TABLE

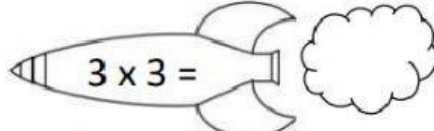
WATCH THE VIDEO BELOW AND ANSWER THE QUESTIONS.

3 TIMES TABLE - ROCKETS

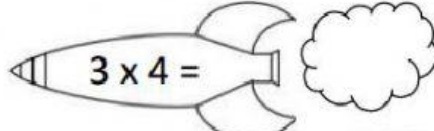
Write the answers inside the rocket smoke.



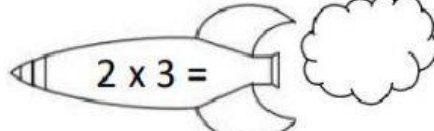
$3 \times 5 =$ 15



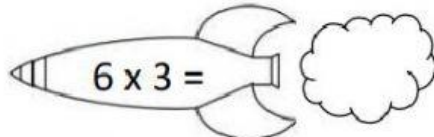
$3 \times 3 =$



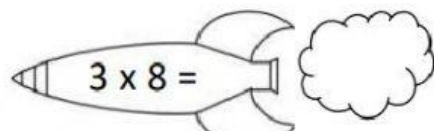
$3 \times 4 =$



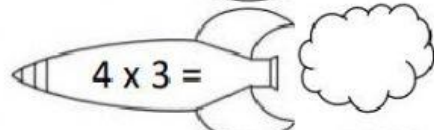
$2 \times 3 =$



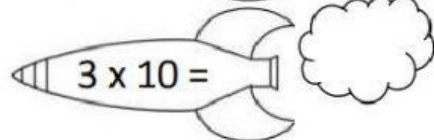
$6 \times 3 =$



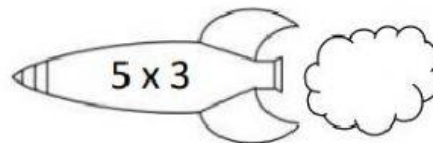
$3 \times 8 =$



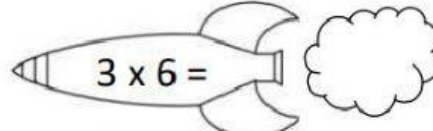
$4 \times 3 =$



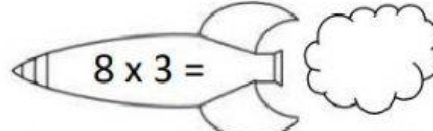
$3 \times 10 =$



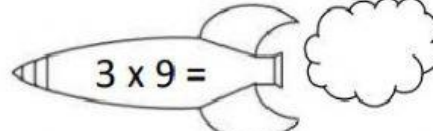
$5 \times 3 =$



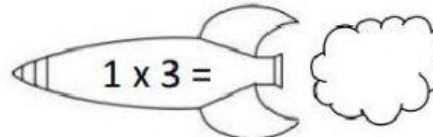
$3 \times 6 =$



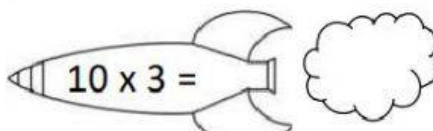
$8 \times 3 =$



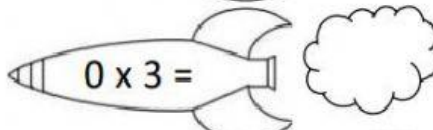
$3 \times 9 =$



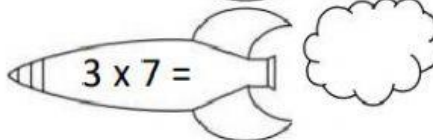
$1 \times 3 =$



$10 \times 3 =$



$0 \times 3 =$



$3 \times 7 =$

3 TIMES TABLE - BEARS

Draw a line to match each bear to his pot of honey.

