
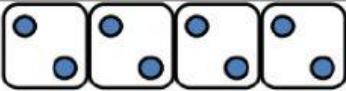





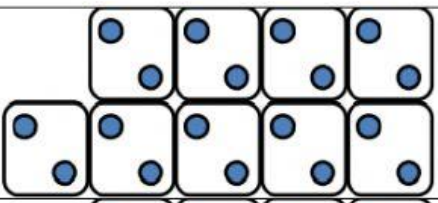
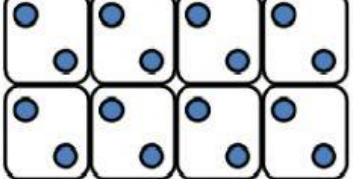


MATHEMATICS

ALL YOU NEED TO DO HERE IS TO MULTIPLY 2 BY THE NUMBER OF BOXES YOU HAVE IN EACH QUESTION. FOR EXAMPLE: 1- IS $2 \times 3 = 6$. YOU HAVE 2 DICES EACH IN 3 BOXES. USE THIS EXAMPLE AND ATTEMPT THE REST QUESTIONS.

2 TIMES TABLE - GROUPS OF 2

Change these groups of 2s into 2 times table multiplication facts.

	$= _ \times _ = 6$
	$= _ \times _ = _$
	$= _ \times _ = _$
	$= _ \times _ = _$
	$= _ \times _ = _$
	$= _ \times _ = _$
	$= _ \times _ = _$
	$= _ \times _ = _$
	$= _ \times _ = _$