

Name: _____

Classifying and Identifying Angles

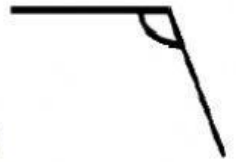
Choose the correct answer.

1) Which angle is Obtuse?

a)



b)



2) Which angle is Acute?

a)

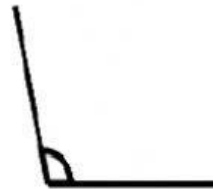


b)




3) Which angle is Right?

a)



b)



4) Which angle is smaller than a right angle?

a) Acute

b) Obtuse

c) Straight angle

5) Which angle is smaller 90°?

a) Acute

b) Obtuse

c) Straight angle