

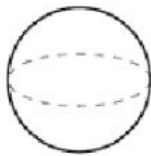
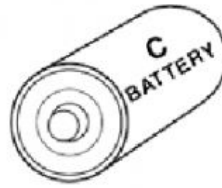
Name \_\_\_\_\_

Reteaching  
**10-1**

## Solid Figures

Three-dimensional objects are called **solid figures**. Solid figures are found in the world in many shapes and sizes.

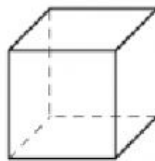
The battery is an example of a **cylinder**. A **solid figure** is named according to its features.



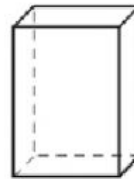
Sphere



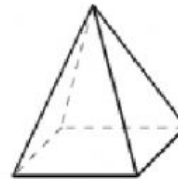
Cone



Cube



Rectangular  
Prism



Pyramid

Write the name of the **solid figure** that each object looks like.

1.



\_\_\_\_\_

2.



\_\_\_\_\_

3.



\_\_\_\_\_

4.



\_\_\_\_\_

5.



6.



7.



8.



9.



10.

