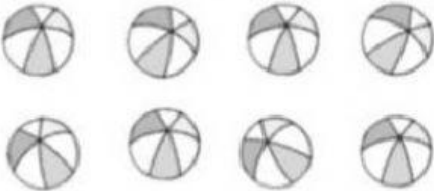







1. Cuenta y elige el número que corresponde con los dibujos:

 6 7 8	 1 4 8
 3 6 9	 5 6 7

2. Completa.

0	▶	1	▶	2	▶		▶		▶		▶		▶		▶		▶	9
9	▶	8	▶	7	▶		▶		▶		▶		▶		▶		▶	0

2. Escribe el anterior y posterior de los siguientes números

___ 5 ___	___ 8 ___	___ 3 ___
___ 1 ___	___ 7 ___	___ 6 ___