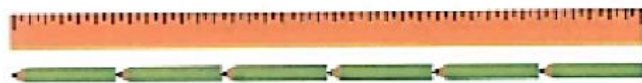


MATHEMATICS

Count the units under each picture.




The length of the ruler is about _____ pencils.



The length of the toy rocket is about _____ paper clips.



The length of the pen is about _____ straws.




The length of his cupboard is about _____ units.

MATHEMATICS

Count the units under each picture.

a)



The eraser is about _____ beads long.

b)




The umbrella is about _____ straws long.

c)



The key is about _____ paper clips long.

d)




The paint brush is about _____ cubes long.

MATHEMATICS

Count the units under each picture.

a) Use  as 1 unit.



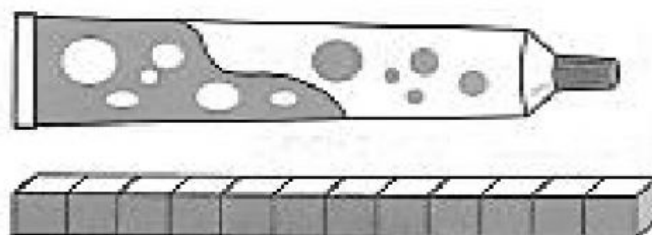
The length of the pen is about _____ units.

b) Use  as 1 unit.



The length of the fork is about _____ units.

c) Use  as 1 unit.



The length of the tube is about _____ units.