


MATHEMATICS

Watch this video first.



Fill in the blanks with **high** , **higher** or **highest**.




- a) Bird B is flying _____ than Bird C.
- b) Bird D is flying the _____.
- c) Bird C is flying _____.

MATHEMATICS

Select the correct answer.

1.



Red


Blue

Orange

Pink

- a) Which ribbon is the longest? _____
- b) Which ribbon is longer than the pink ribbon? _____
- c) Which ribbon is the shortest? _____

2.



Red

Blue


Green

- a) Which cone is the shortest? _____
- b) Which cone is taller than the green cone? _____
- c) Which cone is the tallest? _____

MATHEMATICS

Select the correct image.


1. Select the shorter ribbon.



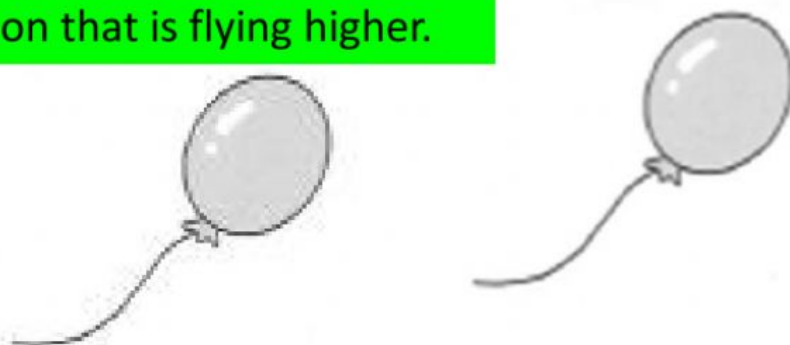
2. Select the longer pencil.



3. Select the bigger tree.



4. Select the balloon that is flying higher.



MATHEMATICS

Select the tallest picture in each block.

