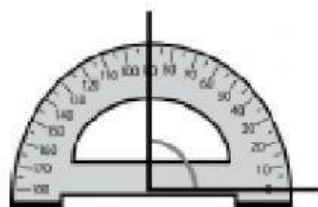



## MEDIMOS CON TRANSPORTADOR


Escribe cuántos grados mide cada uno de los siguientes ángulos.



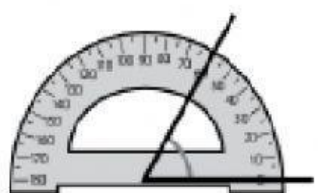
grados



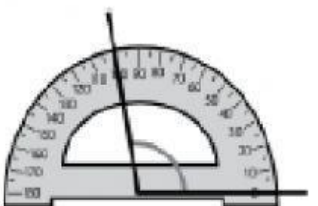
grados



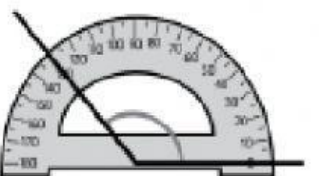
grados



grados



grados



grados

Mide con un transportador



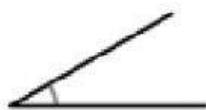
grados



grados



grados



grados



grados



grados