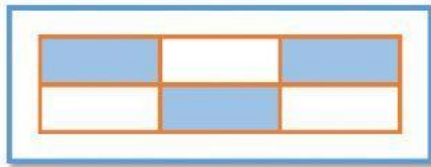



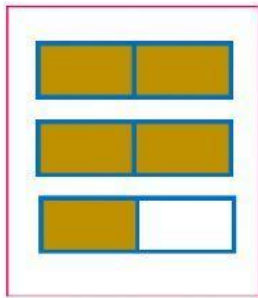
# FRACCIONES # 1

Observa cada gráfica, escribe la fracción correspondiente, selecciona si es propia o impropia y escribe como se lee.



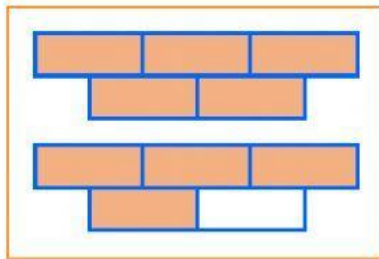
Propia  
Impropia

\_\_\_\_\_




Propia  
Impropia

\_\_\_\_\_





Propia  
Impropia

\_\_\_\_\_



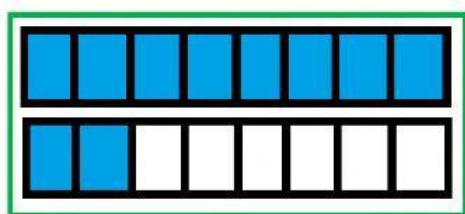
Propia  
Impropia

\_\_\_\_\_



Propia  
Impropia

\_\_\_\_\_



Propia  
Impropia

\_\_\_\_\_