



# DATTA MEGHE WORLD ACADEMY

SECTOR-16, AIROLI, NAVI MUMBAI-400708

## MATHEMATICS JULY PRACTICE WORKSHEET (2020-2021)

Name \_\_\_\_\_ Grade: I Div.: Date: \_\_/0 /2020

### Topic: SUBTRACTION

- Subtraction means **take away** or **remove**.
- It is represented by symbol **-**, which is called as **Minus**.
- The words like **Minus** , **difference**, **remain**, tell us how many **left** .



$$5 - 3 = 2$$



$$3 - 4 = -1$$

- For example:


Qa) Subtract or Cross the objects and find the answer.



1.  $13 - 3 = \underline{\quad}$




2.  $18 - 7 = \underline{\quad}$



3.  $15 - 4 = \underline{\quad}$



4.  $20 - 8 = \underline{\quad}$



























5.  $16 - 3 = \underline{\quad}$



6.  $17 - 7 = \underline{\quad}$

Qb) Subtract toys in each row and write the correct number.

 -  = <input type="text"/>
 -  = <input type="text"/>
 -  = <input type="text"/>
 -  = <input type="text"/>
 -  = <input type="text"/>
 -  = <input type="text"/>
 -  = <input type="text"/>
 -  = <input type="text"/>
 -  = <input type="text"/>
 -  = <input type="text"/>
 -  = <input type="text"/>
 -  = <input type="text"/>

