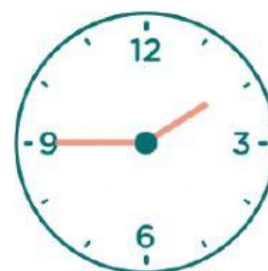


WHAT TIME IS IT?

Look and match.



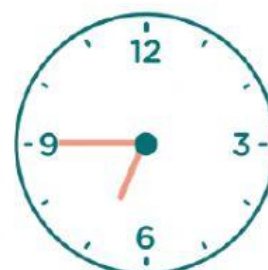
half past eleven



half past eight



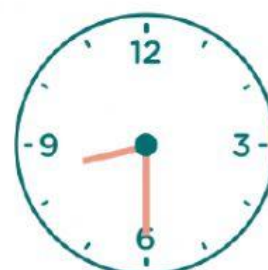
four o'clock



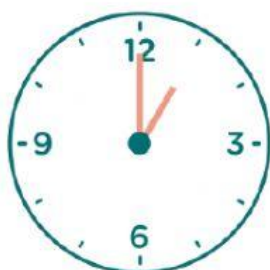
a quarter past twelve



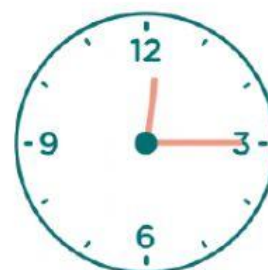
a quarter to two



a quarter past nine



a quarter to seven



one o'clock