

Grade 7 Natural Science revision - term 1 & 2



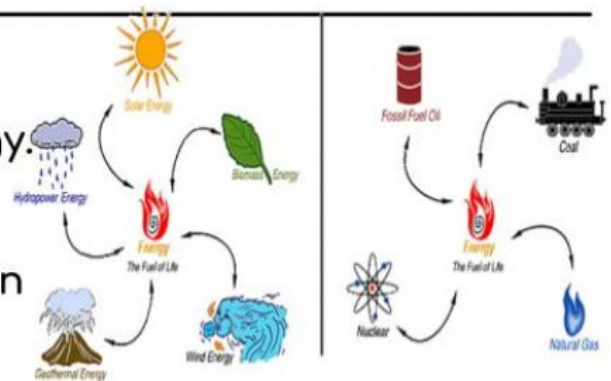
1. What force does this drawing illustrate?

2. Name 2 things that affects the power of the force in question 1.

3. What is the difference between mass and weight?

4. Give an example of a renewable and a non-renewable source of energy.

5. Give one problem associated with using electricity as a source of energy.



6. Name the two types of energy shown in the drawing below.



7. Light is a form of _____.

8. Light is part of the _____ spectrum.





9. When light rays bend, this is called _____.

10. You can see the visible colour _____ in a rainbow.



11. The distance from a crest to the next rest of a wave is called the _____.

12. Label these diagrams below.



14. What kind of lens is in each drawing?

