


得分

姓名:

日期:

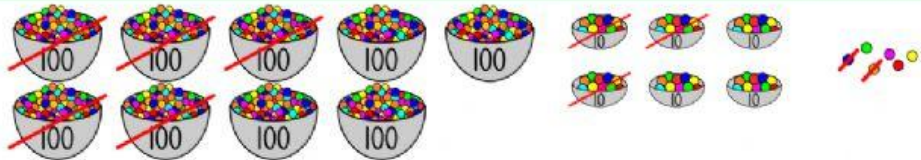
写出算式和答案。

①



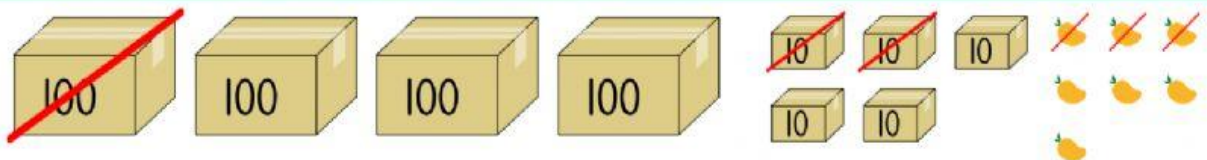
$$\square - \square = \square$$

②



$$\square - \square = \square$$

③



$$\square - \square = \square$$

④



$$\square - \square = \square$$

⑤



$$\square - \square = \square$$