







Name : \_\_\_\_\_ Date: \_\_\_\_\_

Directions: Count the coins and circle the correct answer

	<p>.42</p> <p>.47</p> <p>.62</p>		<p>.71</p> <p>.81</p> <p>.66</p>
	<p>.53</p> <p>.58</p> <p>.48</p>		<p>.95</p> <p>.85</p> <p>.90</p>
	<p>.67</p> <p>.62</p> <p>.47</p>		<p>.44</p> <p>.49</p> <p>.39</p>