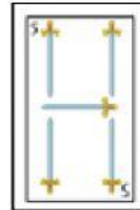
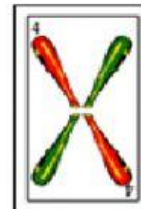



1. Completá con la carta correcta para llegar a 10:



2. Completá los cálculos:



$$\underline{\quad} + \underline{\quad} = 10$$



$$\underline{\quad} + \underline{\quad} = 10$$



$$\underline{\quad} + \underline{\quad} = 10$$