



Orientation Week 2 - Day 1

"Making Number Patterns"

Name : _____

Mark : ____/____


Class : _____

Date : _____

1. What is 1 more?


Write the number.

a.




_____.

b.



_____.

c.




_____.



2. What is 1 less than the number in the orange ball?
Write the number.

a.



_____.

b.



_____.

c.



_____.