

Worksheet Level D

Question 1. REAL WORLD MATH: Needs vs Wants - Read the problem and point to the corresponding items. Read and point to the answer options. Say, "Choose the correct answer." Give wait time and repeat if needed. Remind students that *needs* are things we cannot live without, like food and water. While, *wants* are things we enjoy, like games and snacks but can do without.



Fabiola's favorite class is gym. She loves playing basketball and soccer with her classmates. After gym she gets very thirsty. She needs a drink. Fabiola decides to buy something from the school store. Fabiola has \$2.00. She sees a bottle of water for \$1.00 and her favorite candy bar for \$1.50. Which item does she *need*?

Which of these items does Fabiola needs to live? _____



A. Water



B. Candy Bar

Worksheet Level D

Question 2. REAL WORLD MATH: Needs vs Wants - Read the problem and point to the corresponding items. Read and point to the answer options. Say, "Choose the correct answer." Give wait time and repeat if needed. Remind students that *needs* are things we cannot live without, like food and water. While, *wants* are things we enjoy, like games and snacks but can do without.



Samuel is learning to budget his money. He makes of list of what he spends for the week. But he needs help dividing the list into two charts to show his needs and wants.

Analyze Samuel's expense. Which item below belongs on the Wants Chart? _____

Samuel's Weekly Expenses	
	• MetroCard\$6.00
	• Food\$20.00
	• Snacks.....\$5.00
	• Mario game.....\$1.00

	Needs	Wants
1.		
2.		
3.		



A) Metro Card.



B) Mario Game

Worksheet Level D





Question 3. REAL WORLD MATH: Needs vs Wants - Read the problem and point to the corresponding items. Read and point to the answer options. Say, "Choose the correct answer." Give wait time and repeat if needed. Remind students that *needs* are things we cannot live without, like food and water. While, *wants* are things we enjoy, like games and snacks but can do without.



Samuel is learning to budget his money. He makes of list of what he spends for the week. He needs help dividing the list into two charts to show his needs and wants.

Analyze Samuel's expenses. Which item belongs on the Needs Chart? _____

Samuel's Weekly Expenses

-  • MetroCard\$6.00
-  • Food.....\$20.00
-  • Snacks.....\$5.00
-  • Mario game.....\$1.00

	Needs	Wants
1.		
2.		
3.		


A) Mario Game


B) Food

Worksheet Level D





Question 4. REAL WORLD MATH: Needs vs Wants - Read the problem and point to the corresponding items. Read and point to the answer options. Say, "Choose the correct answer." Give wait time and repeat if needed. Remind students that *needs* are things we cannot live without, like food and water. While, *wants* are things we enjoy, like games and snacks but can do without.







Samuel is learning to budget his money. He makes of list of what he spends for the week. He needs help to divide the list into two charts to show his needs and wants.

How many item are on Samuel's Weekly Expense list? _____

Samuel's Weekly Expenses

-  • MetroCard\$6.00
-  • Food.....\$20.00
-  • Snacks.....\$5.00
-  • Mario game.....\$1.00

	Needs	Wants
1.		
2.		
3.		

A) 5 (Five)

B) 4 (Four)

Worksheet Level D

Question 5. REAL WORLD MATH: Needs vs Wants - Read the problem and point to the corresponding items. Read and point to the answer options. Say, "Choose the correct answer." Give wait time and repeat if needed. Remind students that *needs* are things we cannot live without, like food and water. While, *wants* are things we enjoy, like games and snacks but can do without.



Samuel now wants to track where he spent most of his money.

Analyze Samuel's Weekly Expenses. Which item costs the most? _____

Samuel's Weekly Expenses



• MetroCard\$6.00



• Food.....\$20.00



• Snacks.....\$5.00



• Mario game.....\$1.00

A) Food



B) Mario Game

