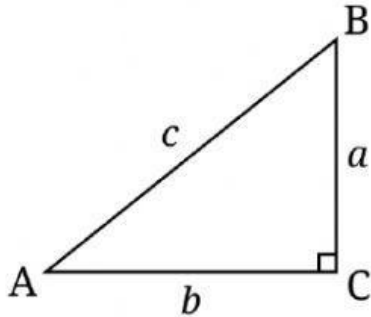
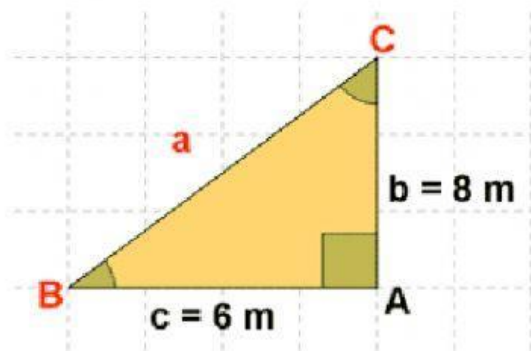


FUNCIONES TRIGONOMETRICAS

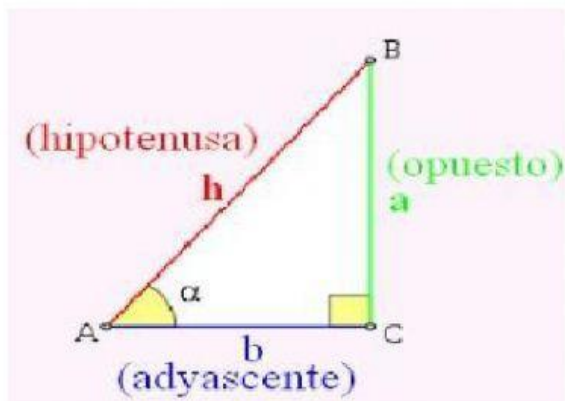
INSTRUCCIONES: ANOTAR LOS LADOS DEL TRIANGULO RECTANGULO DE ACUERDO A LA FUNCION TRIGONOMETRICA QUE INDICA .



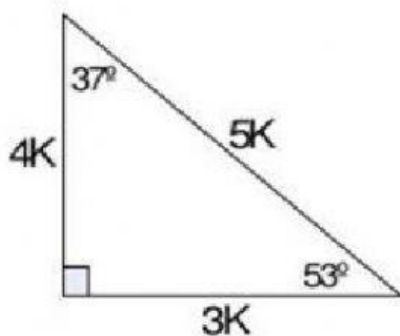
$$\text{Sen } A = \frac{a}{c}$$



$$\text{Cos } C = \frac{b}{c}$$



$$\text{Tan } A = \frac{a}{b}$$



$$\text{Cot } 37^\circ = \frac{4K}{3K}$$