

# Counting Squares

L1S1

 = 1 in<sup>2</sup>

Find the area of each shape by counting the squares.

1)



Area = \_\_\_\_\_

2)



Area = \_\_\_\_\_

3)



Area = \_\_\_\_\_

4)




Area = \_\_\_\_\_

5)




Area = \_\_\_\_\_

6)



Area = \_\_\_\_\_

7)



Area = \_\_\_\_\_

8)



Area = \_\_\_\_\_

9)




Area = \_\_\_\_\_

10)




Area = \_\_\_\_\_

11)



Area = \_\_\_\_\_

12)



Area = \_\_\_\_\_