



Nombre _____




¿Cuántas flores faltan para llegar a 10?




$$8 + \quad = 10$$




$$4 + \quad = 10$$




$$10 + \quad = 10$$




$$6 + \quad = 10$$



$$7 + \quad = 10$$



$$9 + \quad = 10$$



$$5 + \quad = 10$$