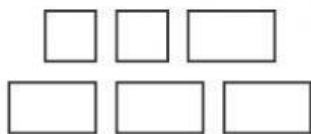


What is the shape of the faces of this object?



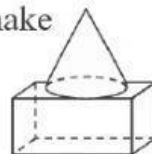
- A. C.
- B.

What object has the faces shown?



- F. H.
- G.

Which three-dimensional shape is not used to make the composite shape shown?




- F. H.
- G.

What is the shape of the faces of this object?



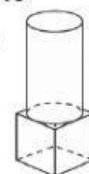
- A. C.
- B.

What object has the face shown?



- F. H.
- G.

Which shape is used to make this composite shape?




- A. C.
- B.

Which shape has 1 face and 1 vertex?

- A. C.
- B. D.

Which object has the faces shown?



- F. G.
- H. I.

Circle the names of the shapes used to make this composite shape.



- cone cylinder
- cube

Circle the shapes used to make the composite shape.

