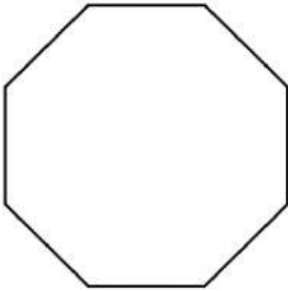


Exterior Angle

Sheet 1

Find the exterior angle for each regular polygon. Round the answer to nearest whole number.

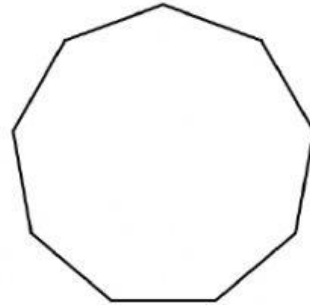
1)



Number of sides = _____

Each exterior angle = _____


2)



Number of sides = _____

Each exterior angle = _____

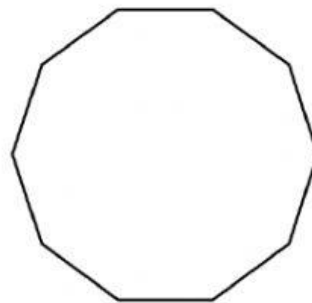
3)



Number of sides = _____

Each exterior angle = _____

4)



Number of sides = _____

Each exterior angle = _____

5) regular 11-gon

Number of sides = _____

Each exterior angle = _____

6) regular 15-gon

Number of sides = _____

Each exterior angle = _____

7) regular 12-gon

Number of sides = _____

Each exterior angle = _____

8) regular 14-gon

Number of sides = _____

Each exterior angle = _____