

NAME:

CLASS:

SHAPES OF MAGNET

Fill in the names of the magnets based on the pictures.

Bar magnet

Cylinder magnet

Horseshoe magnet

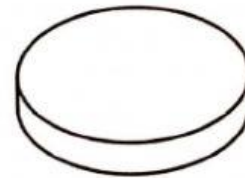
U-shaped magnet

Button magnet

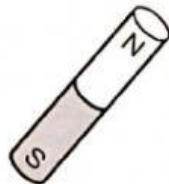
Ring magnet



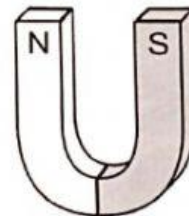
1. _____



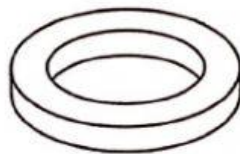
2. _____




3. _____



4. _____



5. _____



6. _____